


## PIÙ UNO

C'era una volta un tale  
che voleva trovare  
il numero più grande del mondo.  
Comincia a contare e mai si stanca:  
gli viene la barba grigia,  
gli viene la barba bianca,  
ma lui conta, conta sempre,  
milioni di milioni,  
di miliardi di miliardi,  
di strabilioni,  
di meraviglioni,  
di meravigliardi ...  
In punto di morte  
scrisse un numero lungo  
dalla Terra a Nettuno.  
Ma un bimbo gridò: - Più uno!  
E il grande calcolatore  
ammise, un poco triste,  
che il numero più grande  
del mondo non esiste.





# IL VALORE DELLE CIFRE

Esercizi graduati con numeri fino a 200

1 Scrivi i numeri nella tabella (0-150):

centodieci  
sedici  
centouno  
centoquarantadue  
novantasei  
centoventitre  
dieci  
centotrentasei  
quarantotto  
centodiciassette  
centoventuno  
centotrentatre  
centocinque  
centoquaranta  
diciotto  
cento

h	da	u
.....	.....	.....
.....	.....	.....
.....	.....	.....
.....	.....	.....
.....	.....	.....
.....	.....	.....
.....	.....	.....
.....	.....	.....
.....	.....	.....
.....	.....	.....
.....	.....	.....
.....	.....	.....
.....	.....	.....
.....	.....	.....
.....	.....	.....
.....	.....	.....
.....	.....	.....

2 Scrivi i numeri nella tabella (0-200):

duecento  
centonovanta  
centosettantatre  
centocinquantasei  
centoottantadue  
centosessantuno  
centonovantanove  
venti  
due  
centosettantotto  
centocinquantadue  
cinquantadue  
cinque  
centoottantotto  
centosettantanove  
centosei

h	da	u
.....	.....	.....
.....	.....	.....
.....	.....	.....
.....	.....	.....
.....	.....	.....
.....	.....	.....
.....	.....	.....
.....	.....	.....
.....	.....	.....
.....	.....	.....
.....	.....	.....
.....	.....	.....
.....	.....	.....
.....	.....	.....
.....	.....	.....
.....	.....	.....
.....	.....	.....

③ Scomponi i numeri come nell'esempio (100 -150):

124 = 1 h + 2 da + 4 u  
104 = .....  
139 = .....  
115 = .....  
147 = .....  
128 = .....  
150 = .....  
134 = .....  
112 = .....  
130 = .....  
141 = .....  
123 = .....  
119 = .....  
106 = .....  
100 = .....  
110 = .....

④ Scomponi i numeri come nell'esempio (150-200):

158 = 1 h + 5 da + 8 u  
198 = .....  
156 = .....  
172 = .....  
160 = .....  
181 = .....  
166 = .....  
179 = .....  
182 = .....  
199 = .....  
170 = .....  
154 = .....  
163 = .....  
195 = .....  
166 = .....  
174 = .....



# IL VALORE DELLE CIFRE


Esercizi graduati con numeri fino a 200

① Leggi e scrivi i numeri in parola (0-150):

- 100 .....
- 150 .....
- 101 .....
- 123 .....
- 110 .....
- 145 .....
- 111 .....
- 122 .....
- 149 .....
- 137 .....
- 116 .....
- 106 .....
- 131 .....
- 148 .....
- 144 .....
- 133 .....

② Leggi e scrivi i numeri in parola (150-200):

- 166 .....
- 200 .....
- 179 .....
- 157 .....
- 188 .....
- 195 .....
- 163 .....
- 170 .....
- 191 .....
- 162 .....
- 153 .....
- 199 .....
- 154 .....
- 177 .....
- 194 .....
- 153 .....



# IL VALORE DELLE CIFRE

Esercizi graduati con numeri fino a 200

① Scomponi i numeri come nell'esempio (100-150):

135 = 100 + 30 + 5  
146 = .....  
113 = .....  
125 = .....  
141 = .....  
128 = .....  
133 = .....  
126 = .....  
143 = .....  
130 = .....  
141 = .....  
123 = .....  
119 = .....  
106 = .....  
100 = .....  
110 = .....

② Scomponi i numeri come nell'esempio (150-200):

168 = 100 + 60 + 8  
198 = .....  
156 = .....  
172 = .....  
160 = .....  
181 = .....  
166 = .....  
179 = .....  
182 = .....  
199 = .....  
170 = .....  
154 = .....  
163 = .....  
195 = .....  
166 = .....  
174 = .....

③ Trasforma (100-150):


12 da = ..... u  
1 h = ..... u  
110 u = ..... da  
11 da = ..... u  
140 u = ..... da  
13 da = ..... u  
15 da = ..... u  
150 u = ..... da  
11 da = ..... u  
130 u = ..... da  
10 da = ..... u

④ Trasforma (150-200):

17 da = ..... u  
2 h = ..... u  
160 u = ..... da  
19 da = ..... u  
180 u = ..... da  
16 da = ..... u  
18 da = ..... u  
170 u = ..... da  
20 da = ..... u  
190 u = ..... da  
200 u = ..... da

# IL VALORE DELLE CIFRE

Esercizi graduati con numeri fino a 200



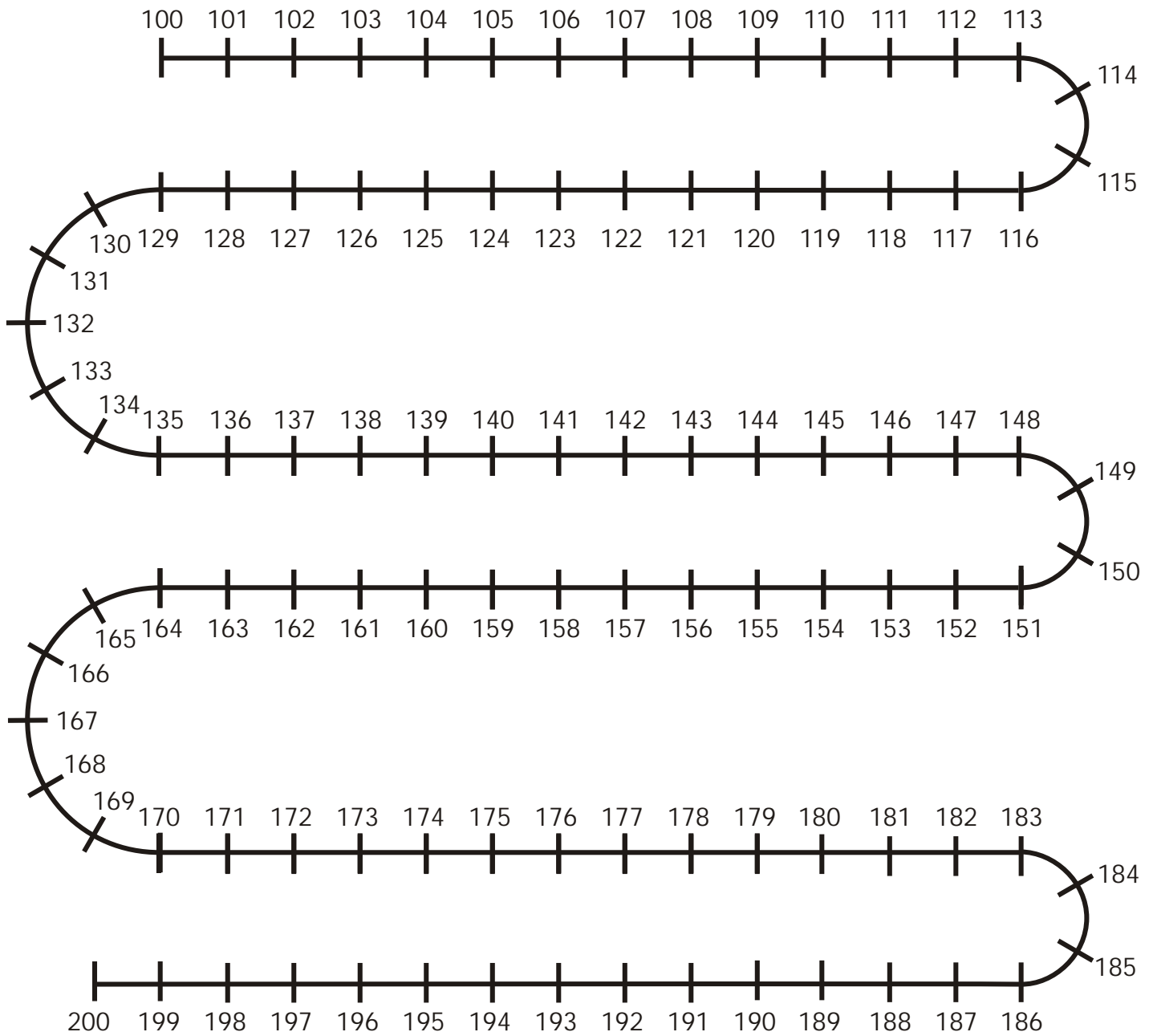
① Calcola (0-150):

$$\begin{array}{l} 5 \text{ u} + 2 \text{ u} = \dots \text{ u} \\ 3 \text{ da} + 4 \text{ da} = \dots \text{ u} \\ 2 \text{ da} + 5 \text{ u} = \dots \text{ u} \\ 1 \text{ h} + 1 \text{ da} = \dots \text{ u} \\ 6 \text{ da} + 4 \text{ da} = \dots \text{ u} \\ 9 \text{ u} + 5 \text{ da} = \dots \text{ u} \\ 3 \text{ da} + 1 \text{ h} = \dots \text{ u} \\ 1 \text{ h} + 8 \text{ u} = \dots \text{ u} \\ 1 \text{ h} - 1 \text{ da} = \dots \text{ u} \\ 1 \text{ h} - 5 \text{ u} = \dots \text{ u} \\ 9 \text{ da} - 8 \text{ da} = \dots \text{ u} \\ 9 \text{ u} - 8 \text{ u} = \dots \text{ u} \\ 7 \text{ da} - 9 \text{ u} = \dots \text{ u} \\ 1 \text{ h} - 5 \text{ da} = \dots \text{ u} \\ 12 \text{ da} - 2 \text{ da} = \dots \text{ u} \\ 4 \text{ da} - 8 \text{ u} = \dots \text{ u} \end{array}$$

② Calcola (150-200):

$$\begin{array}{l} 2 \text{ h} - 1 \text{ h} = \dots \text{ u} \\ 1 \text{ h} + 1 \text{ h} = \dots \text{ u} \\ 2 \text{ h} - 5 \text{ da} = \dots \text{ u} \\ 15 \text{ da} - 6 \text{ da} = \dots \text{ u} \\ 1 \text{ h} + 9 \text{ da} = \dots \text{ u} \\ 6 \text{ da} + 1 \text{ h} = \dots \text{ u} \\ 18 \text{ u} + 1 \text{ h} = \dots \text{ u} \\ 2 \text{ h} - 6 \text{ u} = \dots \text{ u} \\ 2 \text{ h} - 1 \text{ da} = \dots \text{ u} \\ 5 \text{ da} + 12 \text{ da} = \dots \text{ u} \\ 2 \text{ h} - 2 \text{ da} = \dots \text{ u} \\ 1 \text{ h} + 52 \text{ u} = \dots \text{ u} \\ 18 \text{ da} - 8 \text{ u} = \dots \text{ u} \\ 20 \text{ da} - 10 \text{ da} = \dots \text{ u} \\ 10 \text{ da} + 6 \text{ da} = \dots \text{ u} \\ 1 \text{ h} + 7 \text{ da} = \dots \text{ u} \end{array}$$

# Linea dei numeri da 100 a 200



## LE QUATTRO OPERAZIONI ENTRO IL 200



Metti in colonna e calcola:

1

$$\begin{aligned} 64 + 57 &= \underline{\hspace{2cm}} \\ 35 + 78 &= \underline{\hspace{2cm}} \\ 15 + 116 &= \underline{\hspace{2cm}} \\ 47 + 93 &= \underline{\hspace{2cm}} \\ 36 + 108 &= \underline{\hspace{2cm}} \\ 49 + 72 &= \underline{\hspace{2cm}} \\ 14 + 125 &= \underline{\hspace{2cm}} \\ 52 + 59 &= \underline{\hspace{2cm}} \\ 29 + 120 &= \underline{\hspace{2cm}} \\ 3 + 137 &= \underline{\hspace{2cm}} \end{aligned}$$

2

$$\begin{aligned} 128 - 45 &= \underline{\hspace{2cm}} \\ 135 - 55 &= \underline{\hspace{2cm}} \\ 119 - 99 &= \underline{\hspace{2cm}} \\ 136 - 85 &= \underline{\hspace{2cm}} \\ 146 - 87 &= \underline{\hspace{2cm}} \\ 109 - 29 &= \underline{\hspace{2cm}} \\ 143 - 37 &= \underline{\hspace{2cm}} \\ 131 - 32 &= \underline{\hspace{2cm}} \\ 105 - 77 &= \underline{\hspace{2cm}} \\ 128 - 34 &= \underline{\hspace{2cm}} \end{aligned}$$

3

$$\begin{aligned} 19 \times 6 &= \underline{\hspace{2cm}} \\ 17 \times 8 &= \underline{\hspace{2cm}} \\ 45 \times 3 &= \underline{\hspace{2cm}} \\ 18 \times 6 &= \underline{\hspace{2cm}} \\ 72 \times 2 &= \underline{\hspace{2cm}} \\ 33 \times 4 &= \underline{\hspace{2cm}} \\ 67 \times 2 &= \underline{\hspace{2cm}} \\ 27 \times 5 &= \underline{\hspace{2cm}} \\ 14 \times 9 &= \underline{\hspace{2cm}} \\ 44 \times 3 &= \underline{\hspace{2cm}} \end{aligned}$$

4

$$\begin{aligned} 129 : 4 &= \underline{\hspace{2cm}} \\ 193 : 2 &= \underline{\hspace{2cm}} \\ 138 : 9 &= \underline{\hspace{2cm}} \\ 184 : 7 &= \underline{\hspace{2cm}} \\ 145 : 5 &= \underline{\hspace{2cm}} \\ 172 : 3 &= \underline{\hspace{2cm}} \\ 157 : 8 &= \underline{\hspace{2cm}} \\ 161 : 6 &= \underline{\hspace{2cm}} \\ 119 : 4 &= \underline{\hspace{2cm}} \\ 208 : 2 &= \underline{\hspace{2cm}} \end{aligned}$$

## LE QUATTRO OPERAZIONI ENTRO IL 200

Metti in colonna e calcola:



1

$$\begin{aligned} 118 : 9 &= \underline{\hspace{2cm}} \\ 101 - 78 &= \underline{\hspace{2cm}} \\ 15 \times 9 &= \underline{\hspace{2cm}} \\ 150 - 25 &= \underline{\hspace{2cm}} \\ 7 + 13 + 96 &= \underline{\hspace{2cm}} \\ 28 + 10 + 109 &= \underline{\hspace{2cm}} \\ 33 \times 4 &= \underline{\hspace{2cm}} \\ 184 : 2 &= \underline{\hspace{2cm}} \\ 137 - 6 &= \underline{\hspace{2cm}} \\ 12 \times 9 &= \underline{\hspace{2cm}} \end{aligned}$$


2

$$\begin{aligned} 43 \times 3 &= \underline{\hspace{2cm}} \\ 14 + 52 + 67 &= \underline{\hspace{2cm}} \\ 125 : 3 &= \underline{\hspace{2cm}} \\ 112 - 9 &= \underline{\hspace{2cm}} \\ 101 : 3 &= \underline{\hspace{2cm}} \\ 18 \times 6 &= \underline{\hspace{2cm}} \\ 125 - 75 &= \underline{\hspace{2cm}} \\ 27 + 56 + 49 &= \underline{\hspace{2cm}} \\ 118 : 2 &= \underline{\hspace{2cm}} \\ 135 - 23 &= \underline{\hspace{2cm}} \end{aligned}$$

3

$$\begin{aligned} 35 + 74 + 53 &= \underline{\hspace{2cm}} \\ 187 - 129 &= \underline{\hspace{2cm}} \\ 138 : 4 &= \underline{\hspace{2cm}} \\ 37 \times 5 &= \underline{\hspace{2cm}} \\ 115 - 38 &= \underline{\hspace{2cm}} \\ 195 : 3 &= \underline{\hspace{2cm}} \\ 135 + 10 + 6 &= \underline{\hspace{2cm}} \\ 89 \times 2 &= \underline{\hspace{2cm}} \\ 143 : 7 &= \underline{\hspace{2cm}} \\ 19 + 121 + 29 &= \underline{\hspace{2cm}} \end{aligned}$$

## LE QUATTRO OPERAZIONI ENTRO IL 200



Metti in colonna e calcola:

1	$54 + 19 + 65 =$ _____	2	$135 - 23 =$ _____	3	$39 \times 3 =$ _____	4	$138 : 2 =$ _____
	$36 + 38 + 32 =$ _____		$149 - 137 =$ _____		$45 \times 4 =$ _____		$175 : 7 =$ _____
	$65 + 13 + 48 =$ _____		$112 - 9 =$ _____		$17 \times 8 =$ _____		$155 : 3 =$ _____
	$32 + 34 + 45 =$ _____		$148 - 7 =$ _____		$29 \times 3 =$ _____		$108 : 8 =$ _____
	$65 + 20 + 58 =$ _____		$138 - 15 =$ _____		$35 \times 4 =$ _____		$150 : 2 =$ _____
	$14 + 52 + 67 =$ _____		$142 - 58 =$ _____		$43 \times 3 =$ _____		$200 : 5 =$ _____
	$28 + 10 + 109 =$ _____		$125 - 75 =$ _____		$12 \times 9 =$ _____		$132 : 3 =$ _____
	$27 + 102 + 35 =$ _____		$137 - 6 =$ _____		$25 \times 5 =$ _____		$153 : 4 =$ _____
	$5 + 40 + 102 =$ _____		$140 - 23 =$ _____		$15 \times 9 =$ _____		$126 : 6 =$ _____
	$16 + 35 + 85 =$ _____		$101 - 78 =$ _____		$27 \times 4 =$ _____		$118 : 2 =$ _____

## LE QUATTRO OPERAZIONI ENTRO IL 200

Metti in colonna e calcola:



1	$157 - 68 =$ _____	2	$111 : 3 =$ _____	3	$18 + 108 + 18 =$ _____
	$191 : 2 =$ _____		$67 \times 2 =$ _____		$109 - 29 =$ _____
	$114 : 6 =$ _____		$16 + 35 + 85 =$ _____		$206 : 6 =$ _____
	$15 \times 9 =$ _____		$24 \times 5 =$ _____		$35 \times 4 =$ _____
	$149 - 137 =$ _____		$135 - 23 =$ _____		$138 - 15 =$ _____
	$36 + 38 + 32 =$ _____		$54 + 19 + 65 =$ _____		$147 : 5 =$ _____
	$27 \times 5 =$ _____		$27 \times 4 =$ _____		$27 + 102 + 35 =$ _____
	$5 + 55 + 73 =$ _____		$219 : 4 =$ _____		$45 \times 3 =$ _____
	$200 : 9 =$ _____		$154 - 93 =$ _____		$142 : 4 =$ _____
	$141 - 84 =$ _____		$38 + 74 =$ _____		$119 + 21 + 3 =$ _____



## LE QUATTRO OPERAZIONI ENTRO IL 200




Metti in colonna e calcola:

- |                    |                    |                       |                   |
|--------------------|--------------------|-----------------------|-------------------|
| 1                  | 2                  | 3                     | 4                 |
| $64 + 57 =$ _____  | $150 - 25 =$ _____ | $19 \times 6 =$ _____ | $205 : 7 =$ _____ |
| $35 + 78 =$ _____  | $148 - 81 =$ _____ | $17 \times 8 =$ _____ | $135 : 2 =$ _____ |
| $15 + 116 =$ _____ | $87 - 49 =$ _____  | $45 \times 3 =$ _____ | $144 : 8 =$ _____ |
| $47 + 93 =$ _____  | $92 - 64 =$ _____  | $18 \times 6 =$ _____ | $200 : 3 =$ _____ |
| $36 + 108 =$ _____ | $146 - 87 =$ _____ | $72 \times 2 =$ _____ | $217 : 7 =$ _____ |
| $49 + 72 =$ _____  | $109 - 29 =$ _____ | $33 \times 4 =$ _____ | $154 : 9 =$ _____ |
| $14 + 125 =$ _____ | $143 - 37 =$ _____ | $67 \times 2 =$ _____ | $190 : 2 =$ _____ |
| $52 + 59 =$ _____  | $131 - 32 =$ _____ | $27 \times 5 =$ _____ | $179 : 5 =$ _____ |
| $29 + 120 =$ _____ | $105 - 77 =$ _____ | $14 \times 9 =$ _____ | $154 : 4 =$ _____ |
| $3 + 137 =$ _____  | $128 - 34 =$ _____ | $44 \times 3 =$ _____ | $168 : 6 =$ _____ |


## LE QUATTRO OPERAZIONI ENTRO IL 200

Metti in colonna e calcola:



- |                        |                        |                        |
|------------------------|------------------------|------------------------|
| 1                      | 2                      | 3                      |
| $32 + 34 + 45 =$ _____ | $123 + 16 =$ _____     | $44 \times 3 =$ _____  |
| $142 - 58 =$ _____     | $121 : 8 =$ _____      | $36 + 38 + 32 =$ _____ |
| $25 \times 5 =$ _____  | $123 - 35 =$ _____     | $132 - 27 =$ _____     |
| $120 : 5 =$ _____      | $72 \times 2 =$ _____  | $145 : 7 =$ _____      |
| $19 \times 6 =$ _____  | $104 : 4 =$ _____      | $126 : 4 =$ _____      |
| $84 + 45 =$ _____      | $29 \times 3 =$ _____  | $28 \times 4 =$ _____  |
| $149 - 137 =$ _____    | $148 - 7 =$ _____      | $112 - 9 =$ _____      |
| $203 : 7 =$ _____      | $65 + 20 + 58 =$ _____ | $65 + 13 + 48 =$ _____ |
| $140 - 23 =$ _____     | $139 : 4 =$ _____      | $14 \times 9 =$ _____  |
| $5 + 40 + 102 =$ _____ | $17 \times 8 =$ _____  | $54 + 19 + 65 =$ _____ |

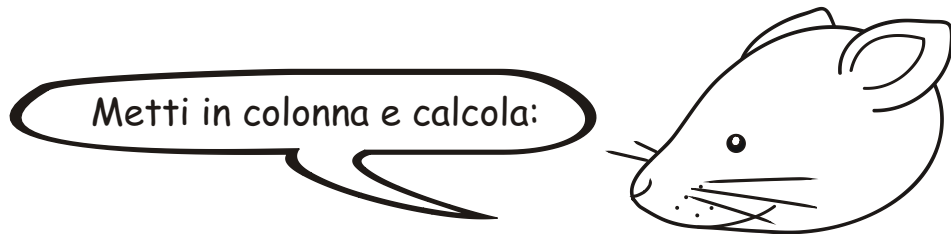
## LE QUATTRO OPERAZIONI ENTRO IL 200



Metti in colonna e calcola:

1	2	3	4
$64 + 57 =$ _____	$128 - 45 =$ _____	$19 \times 6 =$ _____	$29 : 4 =$ _____
$35 + 78 =$ _____	$135 - 55 =$ _____	$17 \times 8 =$ _____	$19 : 2 =$ _____
$15 + 116 =$ _____	$119 - 99 =$ _____	$45 \times 3 =$ _____	$38 : 9 =$ _____
$47 + 93 =$ _____	$136 - 85 =$ _____	$18 \times 6 =$ _____	$58 : 7 =$ _____
$36 + 108 =$ _____	$146 - 87 =$ _____	$72 \times 2 =$ _____	$48 : 5 =$ _____
$49 + 72 =$ _____	$109 - 29 =$ _____	$33 \times 4 =$ _____	$19 : 3 =$ _____
$14 + 125 =$ _____	$143 - 37 =$ _____	$67 \times 2 =$ _____	$57 : 8 =$ _____
$52 + 59 =$ _____	$131 - 32 =$ _____	$27 \times 5 =$ _____	$41 : 6 =$ _____
$29 + 120 =$ _____	$105 - 77 =$ _____	$14 \times 9 =$ _____	$38 : 4 =$ _____
$3 + 137 =$ _____	$128 - 34 =$ _____	$44 \times 3 =$ _____	$15 : 2 =$ _____

## LE QUATTRO OPERAZIONI ENTRO IL 200



Metti in colonna e calcola:

1	2	3
$67 : 9 =$ _____	$43 \times 3 =$ _____	$35 + 74 + 53 =$ _____
$101 - 78 =$ _____	$14 + 52 + 67 =$ _____	$187 - 129 =$ _____
$15 \times 9 =$ _____	$25 : 3 =$ _____	$38 : 4 =$ _____
$150 - 25 =$ _____	$112 - 9 =$ _____	$37 \times 5 =$ _____
$7 + 13 + 96 =$ _____	$11 : 3 =$ _____	$115 - 38 =$ _____
$28 + 10 + 109 =$ _____	$18 \times 6 =$ _____	$15 : 3 =$ _____
$33 \times 4 =$ _____	$125 - 75 =$ _____	$135 + 10 + 6 =$ _____
$14 : 2 =$ _____	$27 + 56 + 49 =$ _____	$89 \times 2 =$ _____
$137 - 6 =$ _____	$18 : 2 =$ _____	$43 : 7 =$ _____
$12 \times 9 =$ _____	$135 - 23 =$ _____	$19 + 121 + 29 =$ _____

## LE QUATTRO OPERAZIONI ENTRO IL 200




Mettili in colonna e calcola:

1	$54 + 19 + 65 =$ _____	2	$135 - 23 =$ _____	3	$39 \times 3 =$ _____	4	$18 : 2 =$ _____
	$36 + 38 + 32 =$ _____		$149 - 137 =$ _____		$45 \times 4 =$ _____		$65 : 7 =$ _____
	$65 + 13 + 48 =$ _____		$112 - 9 =$ _____		$17 \times 8 =$ _____		$15 : 3 =$ _____
	$32 + 34 + 45 =$ _____		$148 - 7 =$ _____		$29 \times 3 =$ _____		$18 : 8 =$ _____
	$65 + 20 + 58 =$ _____		$138 - 15 =$ _____		$35 \times 4 =$ _____		$15 : 2 =$ _____
	$14 + 52 + 67 =$ _____		$142 - 58 =$ _____		$43 \times 3 =$ _____		$20 : 5 =$ _____
	$28 + 10 + 109 =$ _____		$125 - 75 =$ _____		$12 \times 9 =$ _____		$22 : 3 =$ _____
	$27 + 102 + 35 =$ _____		$137 - 6 =$ _____		$25 \times 5 =$ _____		$33 : 4 =$ _____
	$5 + 40 + 102 =$ _____		$140 - 23 =$ _____		$15 \times 9 =$ _____		$26 : 6 =$ _____
	$16 + 35 + 85 =$ _____		$101 - 78 =$ _____		$27 \times 4 =$ _____		$13 : 2 =$ _____

## LE QUATTRO OPERAZIONI ENTRO IL 200

Mettili in colonna e calcola:



1	$157 - 68 =$ _____	2	$24 : 3 =$ _____	3	$18 + 108 + 18 =$ _____
	$11 : 2 =$ _____		$67 \times 2 =$ _____		$109 - 29 =$ _____
	$14 : 6 =$ _____		$16 + 35 + 85 =$ _____		$26 : 6 =$ _____
	$15 \times 9 =$ _____		$24 \times 5 =$ _____		$35 \times 4 =$ _____
	$149 - 137 =$ _____		$135 - 23 =$ _____		$138 - 15 =$ _____
	$36 + 38 + 32 =$ _____		$54 + 19 + 65 =$ _____		$47 : 5 =$ _____
	$27 \times 5 =$ _____		$27 \times 4 =$ _____		$27 + 102 + 35 =$ _____
	$5 + 55 + 73 =$ _____		$25 : 4 =$ _____		$45 \times 3 =$ _____
	$20 : 9 =$ _____		$154 - 93 =$ _____		$27 : 4 =$ _____
	$141 - 84 =$ _____		$38 + 74 =$ _____		$119 + 21 + 3 =$ _____

## LE QUATTRO OPERAZIONI ENTRO IL 200




Metti in colonna e calcola:

- |                    |                    |                       |                  |
|--------------------|--------------------|-----------------------|------------------|
| 1                  | 2                  | 3                     | 4                |
| $64 + 57 =$ _____  | $150 - 25 =$ _____ | $19 \times 6 =$ _____ | $25 : 7 =$ _____ |
| $35 + 78 =$ _____  | $148 - 81 =$ _____ | $17 \times 8 =$ _____ | $15 : 2 =$ _____ |
| $15 + 116 =$ _____ | $87 - 49 =$ _____  | $45 \times 3 =$ _____ | $44 : 8 =$ _____ |
| $47 + 93 =$ _____  | $92 - 64 =$ _____  | $18 \times 6 =$ _____ | $20 : 3 =$ _____ |
| $36 + 108 =$ _____ | $146 - 87 =$ _____ | $72 \times 2 =$ _____ | $21 : 7 =$ _____ |
| $49 + 72 =$ _____  | $109 - 29 =$ _____ | $33 \times 4 =$ _____ | $54 : 9 =$ _____ |
| $14 + 125 =$ _____ | $143 - 37 =$ _____ | $67 \times 2 =$ _____ | $19 : 2 =$ _____ |
| $52 + 59 =$ _____  | $131 - 32 =$ _____ | $27 \times 5 =$ _____ | $79 : 8 =$ _____ |
| $29 + 120 =$ _____ | $105 - 77 =$ _____ | $14 \times 9 =$ _____ | $34 : 4 =$ _____ |
| $3 + 137 =$ _____  | $128 - 34 =$ _____ | $44 \times 3 =$ _____ | $58 : 6 =$ _____ |

## LE QUATTRO OPERAZIONI ENTRO IL 200

Metti in colonna e calcola:



- |                        |                        |                        |
|------------------------|------------------------|------------------------|
| 1                      | 2                      | 3                      |
| $32 + 34 + 45 =$ _____ | $123 + 16 =$ _____     | $44 \times 3 =$ _____  |
| $142 - 58 =$ _____     | $21 : 8 =$ _____       | $36 + 38 + 32 =$ _____ |
| $25 \times 5 =$ _____  | $123 - 35 =$ _____     | $132 - 27 =$ _____     |
| $12 : 5 =$ _____       | $72 \times 2 =$ _____  | $45 : 7 =$ _____       |
| $19 \times 6 =$ _____  | $14 : 4 =$ _____       | $26 : 4 =$ _____       |
| $84 + 45 =$ _____      | $29 \times 3 =$ _____  | $28 \times 4 =$ _____  |
| $149 - 137 =$ _____    | $148 - 7 =$ _____      | $112 - 9 =$ _____      |
| $23 : 7 =$ _____       | $65 + 20 + 58 =$ _____ | $65 + 13 + 48 =$ _____ |
| $140 - 23 =$ _____     | $39 : 4 =$ _____       | $14 \times 9 =$ _____  |
| $5 + 40 + 102 =$ _____ | $17 \times 8 =$ _____  | $54 + 19 + 65 =$ _____ |